



The millipede is 10cm long and the caterpillar is 7cm long. How long are they altogether?
Can you write a sum to show this?



The 12 bees live in these 3 hives. Find all the different ways they can be arranged.




How many in each if they are shared fairly?


The first ladybird has 8 spots, the second ladybird has 7 spots and the last ladybird has 9 spots. How many spots are there altogether?



Each tree has 10 spiders.
How many spiders are there in 3 trees?



Snail has 2 eyes. How many eyes would there be on 8 snails altogether?



Choose 2 odd numbers and add them together. What do you notice?

Try this with different odd numbers.

1 3 5 7 9 11 13

What happens?

Why does this happen?



The worm is double the length of the caterpillar. The Caterpillar is 7cm long, how long is the worm?

There are 15 aphids on the leaf.
A ladybird eats 6 of them, how many are left?
Can you write this as a subtraction?

